

Tick-Tock Time Challenge




Circle the correct time shown on each clock.



quarter past 10

quarter to 10

5 minutes past 10



half past 7

quarter to 7


quarter past 7



quarter to 2

quarter past 3

quarter past 2



quarter past 5

quarter to 5

5 o'clock



10 minutes to 1

9 o'clock

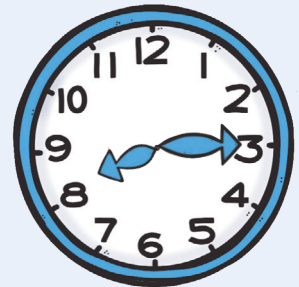
quarter to 1



quarter to 8

quarter past 8


20 minutes to 3



quarter to 9

25 minutes to 9


quarter past 9



20 minutes to 3

3 o'clock

quarter past 3



Tick-Tock Time Challenge

Answers




Circle the correct time shown on each clock.



quarter past 10

quarter to 10

5 minutes past 10



half past 7

quarter to 7


quarter past 7



quarter to 2

quarter past 3

quarter past 2



quarter past 5

quarter to 5

5 o'clock



10 minutes to 1

9 o'clock

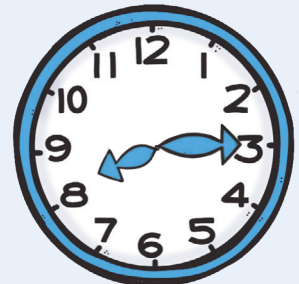
quarter to 1



quarter to 8

quarter past 8

20 minutes to 3



quarter to 9

25 minutes to 9

quarter past 9



20 minutes to 3

3 o'clock

quarter past 3

