


Telling the Time to 5 Minutes


Can you help Layla the Llama tell the time?
Circle the correct time shown on each clock.



20 minutes past 3

10 minutes past 3


3 o'clock



20 minutes to 1

1 o'clock


5 minutes past 8



half past 11

5 minutes to 6

25 minutes to 6



25 minutes past 9

quarter to 5

25 minutes past 7


Telling the Time to 5 Minutes



20 minutes past 1

5 minutes to 4


5 minutes past 4



10 minutes to 3

quarter past 10

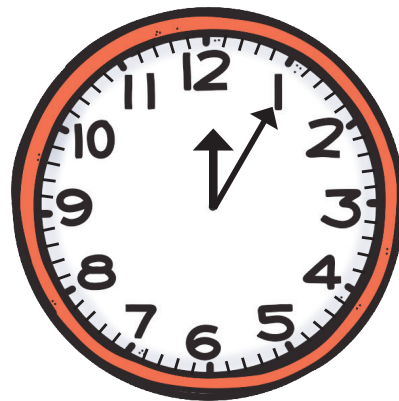
10 minutes past 3



25 minutes to 1

half past 12


25 minutes past 12



1 o'clock

5 minutes to 1


5 minutes past 12



Telling the Time to 5 Minutes

Answers


Can you help Layla the Llama tell the time?
Circle the correct time shown on each clock.



20 minutes past 3

10 minutes past 3


3 o'clock



20 minutes to 1

1 o'clock


5 minutes past 8



half past 11

5 minutes to 6

25 minutes to 6



25 minutes past 9

quarter to 5

25 minutes past 7

Telling the Time to 5 Minutes


Answers



20 minutes past 1

5 minutes to 4


5 minutes past 4



10 minutes to 3

quarter past 10

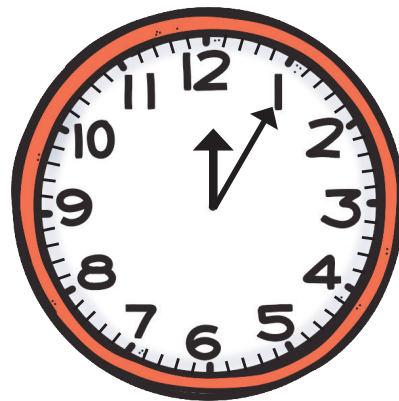
10 minutes past 3



25 minutes to 1

half past 12

25 minutes past 12



1 o'clock

5 minutes to 1

5 minutes past 12

